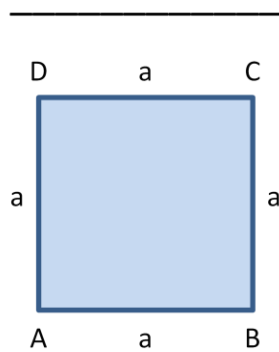


Quadrat – Rechteck – rechtwinkeliges Dreieck

Flächeninhalt und Umfang

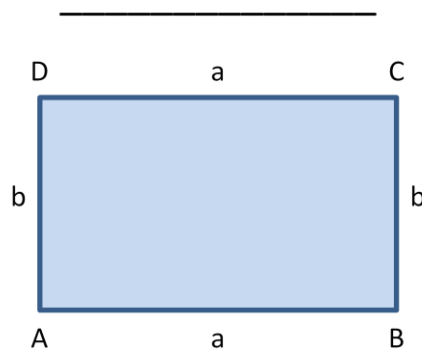
Aufgabe:

Benenne die folgenden Figuren richtig und wiederhole die Formeln für Flächeninhalt und Umfang!



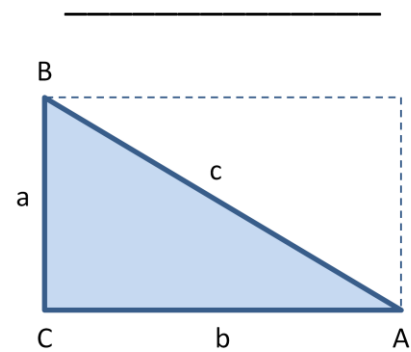
u = _____

A = _____



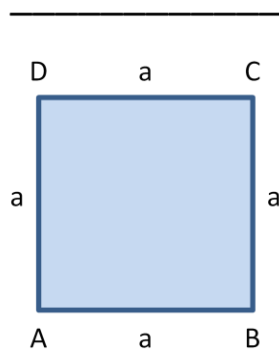
u = _____

A = _____



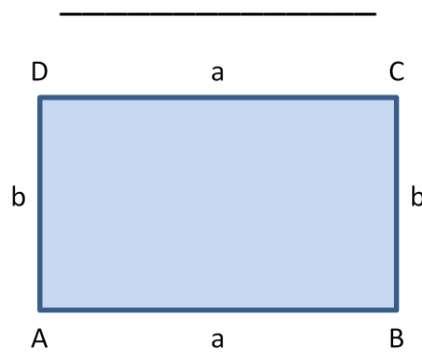
u = _____

A = _____



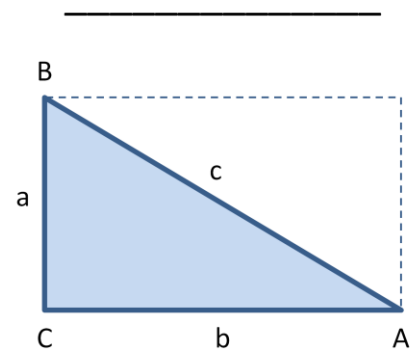
u = _____

A = _____



u = _____

A = _____



u = _____

A = _____